



NAME _____


DATE _____

DRAW HANDS FOR THE CLOCKS


Draw the minute and hour hand on the clocks.

Example:


7 : 30




1) 2 : 30




2) 9 : 30




3) 4 : 00




4) 6 : 00




5) 1 : 00




6) 11 : 30



7) 5 : 00



8) 8 : 30



9) 3 : 30

